



BAL BHARATI PUBLIC SCHOOL, NAVI MUMBAI

SUB: - MATHEMATICS (2020-21)

STD: - III

Lesson- 3 Place Value and Numbers Worksheet-1

NAME: - _____ ROLL NO.: - _____ DATE :- _____

Let's Revisit what you already know

Largest one digit number is = _____

Now add 1 to the largest one digit number = _____

So the smallest two digit number is = _____

Largest two digit number is = _____

Now add 1 to the largest two digit number = _____

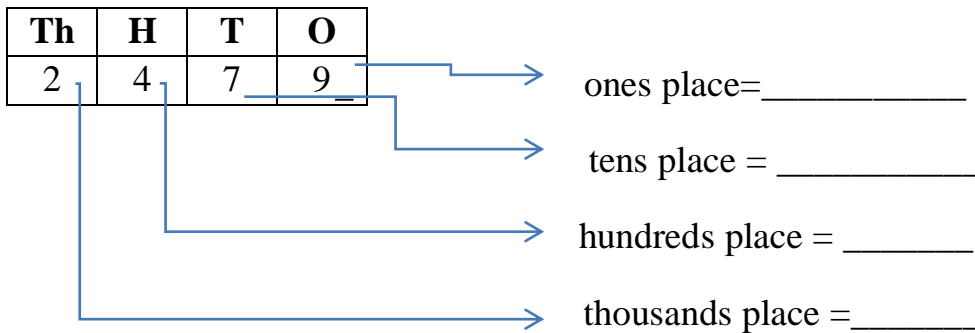
So the smallest three digit number is = _____

Largest three digit number = _____

Now add 1 to the largest three digit no. = _____

Smallest four digit number = _____

Now let's find the the place value of a 4 – digit number



put the digits in proper place find The place value of digit 5 in each number

(one is done for you)

Number	Thousand (Th)	Hundreds(H)	Ten(T)	Ones(O)	Place value
24 <u>5</u> 6	2	4	5	6	5 tens or 50
4 <u>5</u> 28					
897 <u>5</u>					
<u>5</u> 340					

1) Write down which digit is in the **ones** place:

1267 → 7	4235 →	3190 →	8302 →
----------	--------	--------	--------

2) Write down which digit is in the **tens** place:

2743 →	5194 →	8320 →	307 →
--------	--------	--------	-------

3) Write down which digit is in the **hundreds** place:

6035 →	3502 →	1238 →	839 →
--------	--------	--------	-------

4) Write down which digit is in the **thousands** place:

6235 →	8302 →	1428 →	389 →
--------	--------	--------	-------

5) Have a go at the riddle below:

- I am a 4-digit number.
- My thousands digit is more than 6.
- My hundreds digit is odd.
- My tens digit is not less than 6.
- Who am I?

7261	8073	3925
973	6372	5307
9374	6963	977

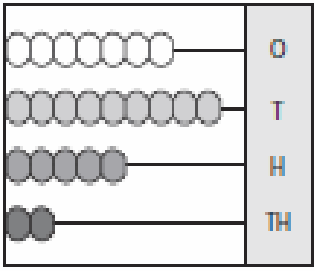
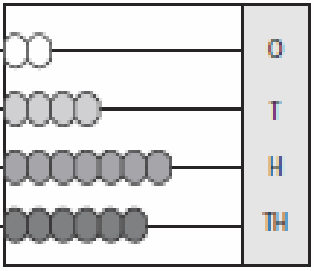
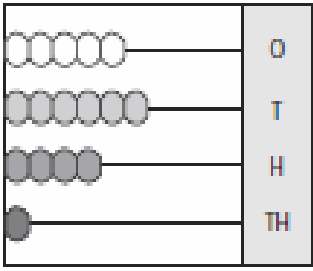
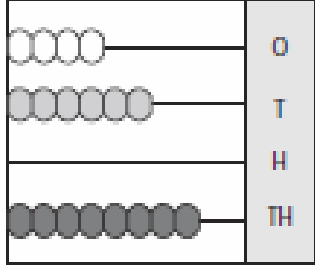
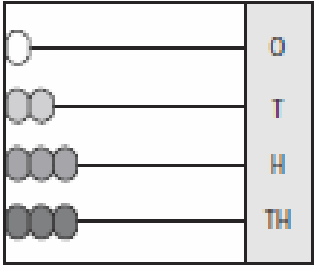
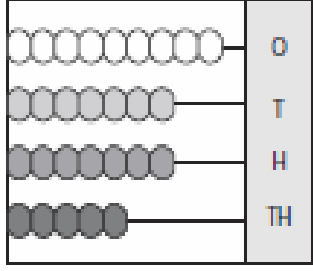
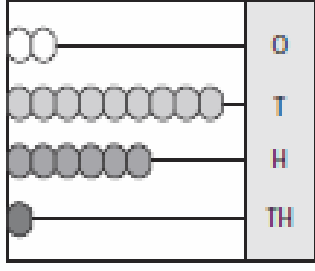
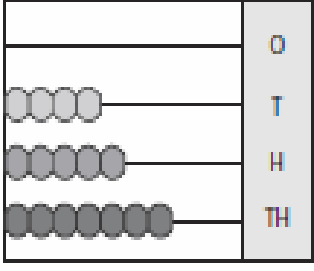
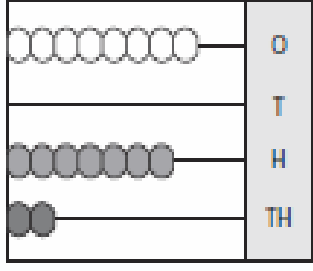
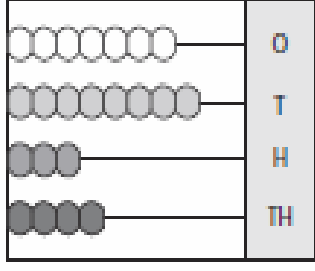
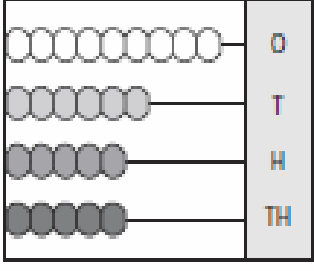
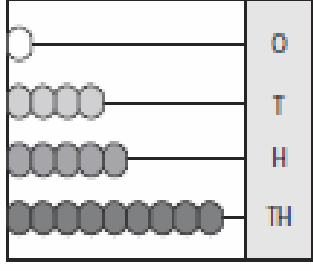
6) Write the largest 4- digit number = _____

7) Draw abacus and represent the following numbers in it.

a) 2256	b) 5920	c) 6872
---------	---------	---------

Place Value - Abacus

Write the number formed by each abacus.

<p>1)</p>  <p style="text-align: center;">_____</p>	<p>2)</p>  <p style="text-align: center;">_____</p>	<p>3)</p>  <p style="text-align: center;">_____</p>
<p>4)</p>  <p style="text-align: center;">_____</p>	<p>5)</p>  <p style="text-align: center;">_____</p>	<p>6)</p>  <p style="text-align: center;">_____</p>
<p>7)</p>  <p style="text-align: center;">_____</p>	<p>8)</p>  <p style="text-align: center;">_____</p>	<p>9)</p>  <p style="text-align: center;">_____</p>
<p>10)</p>  <p style="text-align: center;">_____</p>	<p>11)</p>  <p style="text-align: center;">_____</p>	<p>12)</p>  <p style="text-align: center;">_____</p>